

Page 32

Topic Mapping Your Way

Worksheet - 4

Month

Date

Competency Problem Solving Ability

Your Grandfather wants to visit your school. Prepare a route map to guide your Grandfather from the school gate to your classroom.

Teacher's Signature

Parent Signature

Page 29
Topic Mapping Your Way

Topic - Mapping your way

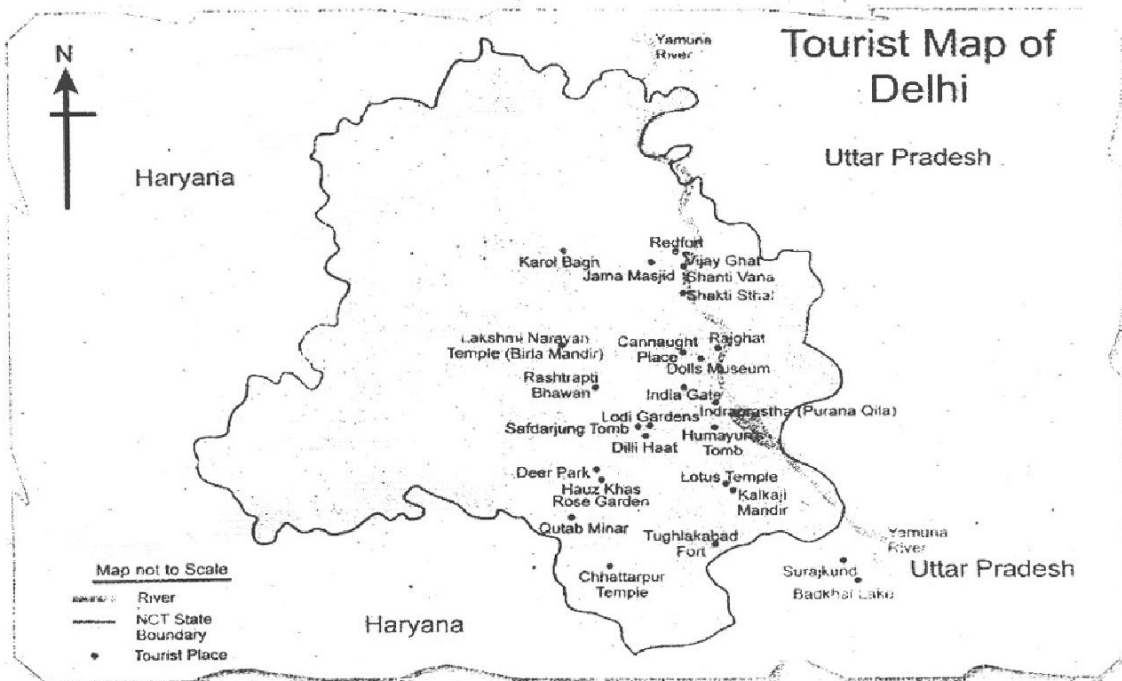
Worksheet - 1

Month

Date

Competency Problem Solving Ability

1. Study the tourist map of Delhi and answer the questions that follow



- (a) Name two tourist spots that are located in—

- Central Delhi
- South Delhi

- (b) Name two states which have boundaries with Delhi.

- (c) In which part of Delhi are the following located?

- Connaught place
- Red Fort
- Lotus temple

Teacher's Signature

Parent Signature

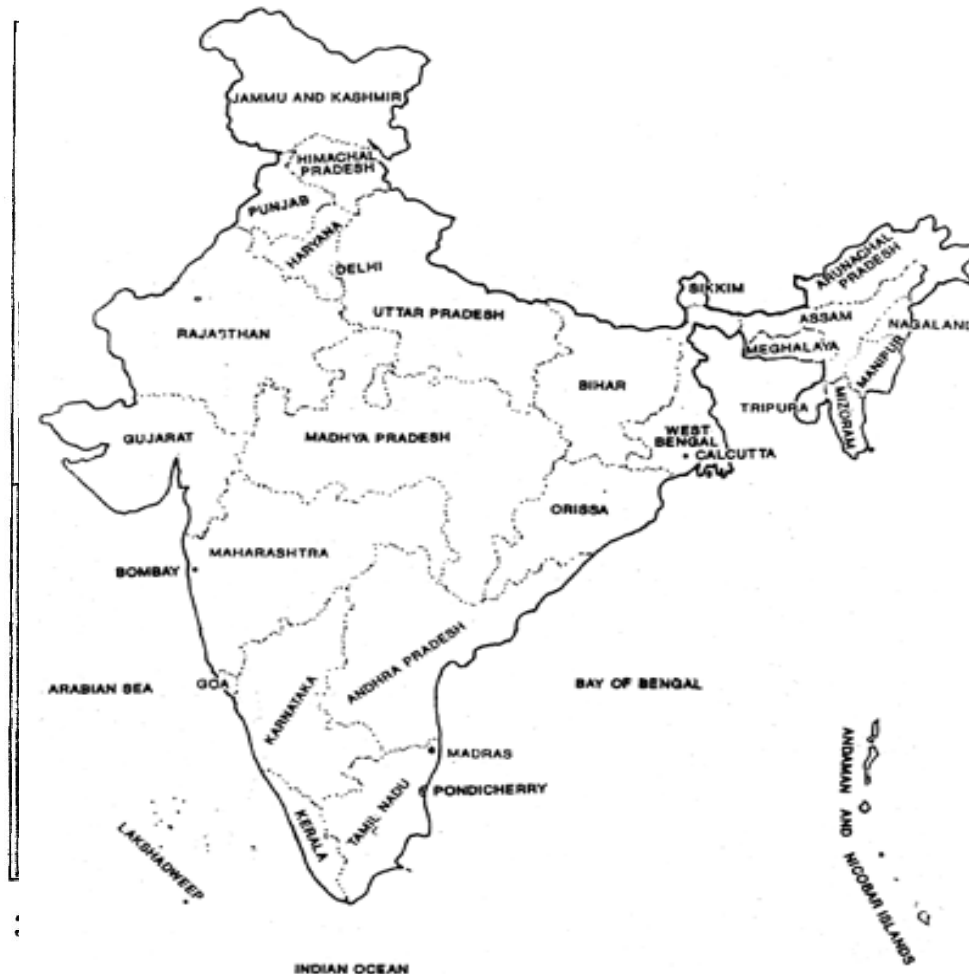
Worksheet - 2

Month

Date

Competency Problem Solving Ability

1. Look at the given map of India and answer the questions that follow :



(a) Name :

.....

(b) Name 4 eastern states of India.

.....

(c) Name 3 states to the north of Delhi.

.....

(d) Paresh is going from Rajasthan to Assam. Name the states which fall in between her route.

.....


(e) Rashmi is going from Himachal Pradesh to Bangalore (Karnataka). Name the states which fall in between her route.

Page 31
Topic Mapping Your Way

Date _____
Month _____

Competency: Problem solving Ability

Prepare a route map from your house to your school and mark the important places which u come across.



Teacher's Sign _____

Parent's Sign _____